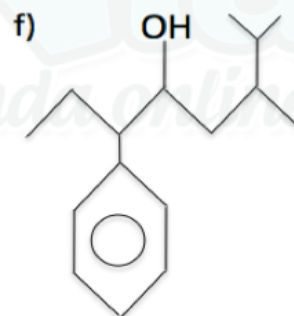
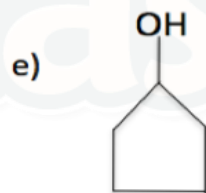
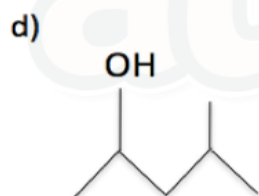
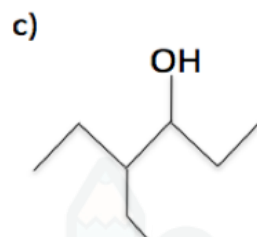
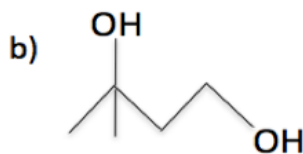
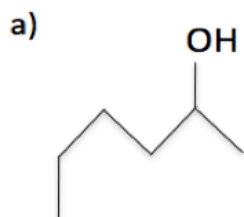


Álcool

1) Dê as nomenclaturas dos álcoois:



2) Dê as fórmulas estruturais:

1) a) 3-etil-pentan-2-ol

b) 2,4,5-trimetil-hexanol

c) 4-metil-ciclopentan-1,2-diol

d) 3,4-metil-pentan-2-ol

e) fenil-metanol

f) 3-benzil-6-isopropil-octan-4-ol

Gabarito

1) a) hexan-2-ol

b) 3-metil-butan-1,3-diol

c) 4-etil-hexan-3-ol

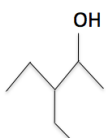
d) 4-metil-pentan-2-ol

e) ciclopentanol

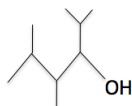
f) 3-fenil-6,7- dimetil-octan-4-ol

2)

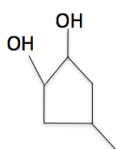
a)



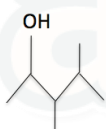
b)



c)



d)



e)



f)

