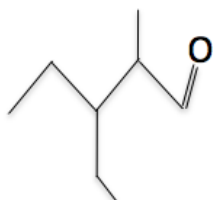


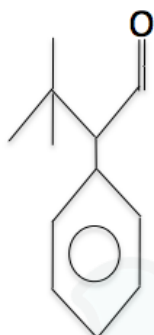
Aldeído

1) Dê as nomenclaturas dos aldeídos:

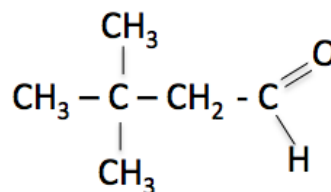
a)



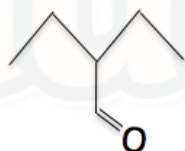
b)



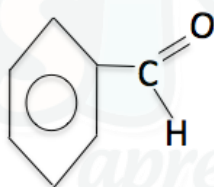
c)



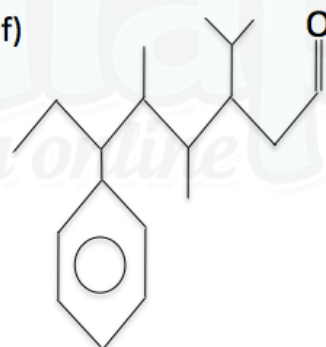
d)



e)



f)



2) Dê as fórmulas estruturais:

a) 3-metil-pentanal

b) propenal

c) 2-fenil-3-metil-hexanal

d) propanoial

e) etanal

f) 2-metil-pentanal

Gabarito

- 1) a) 3-etil-2-metil-pentanal
- b) 2-benzil-3,3-dimetil-butanal
- c) 3,3-dimetil-butanal
- d) 2-etil-butanal
- e) fenil-metanal
- f) 6-fenil-3-isopropil-4,5-dimetil-octanal

2)

a)



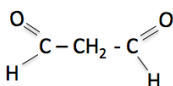
b)



c)



d)



e)



f)

