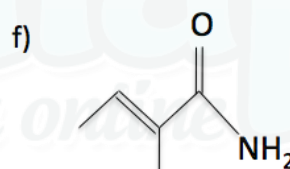
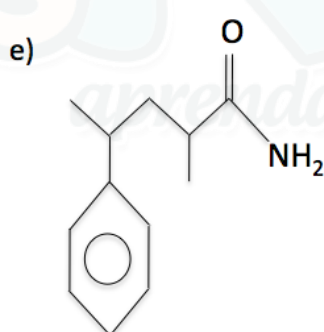
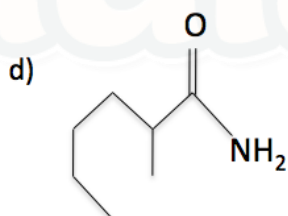
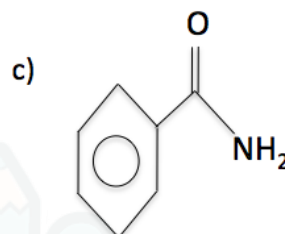
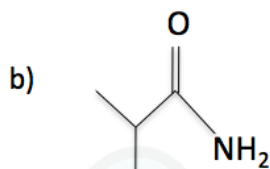
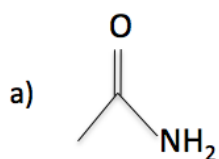


Amida

1) Dê as nomenclaturas:



2) Dê as fórmulas estruturais:

a) propanamida

b) 2-metil butanamida

c) fenil metanamida

d) 2-metil-pentanamida

e) 4-fenil-2,3-dimetil-pentanamida

f) but-2-enamida

Gabarito

- 1) a) etanamida
- b) metil propanamida
- c) fenil metanamida
- d) 2-metil-hexanamida
- e) 4-fenil-2-metil-pentanamida
- f) 2-metil-but-2-enamida

2)

