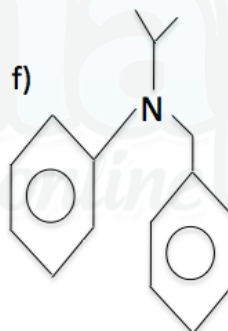
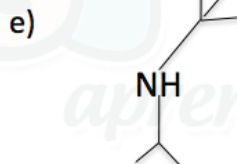
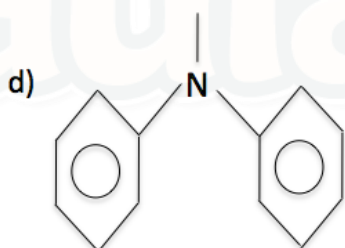
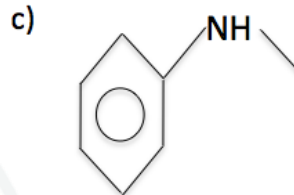
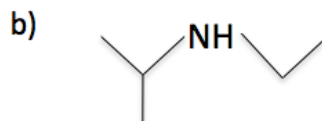


## Amina

1) Dê as nomenclaturas:



2) Dê as fórmulas estruturais:

a) etilamina

b) iso-butilamina

c) fenilamina

d) difenilamina

e) iso-butil-diisopropilamina

f) benzil-secpropilamina

Gabarito

- 1) a) iso-butilamina
- b) etil iso-propilamina
- c) fenil metilamina
- d) difenil metilamina
- e) terc-butil-iso-propilamina
- f) benzil fenil-sec-propilamina

2)

