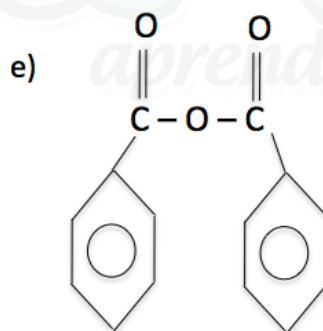
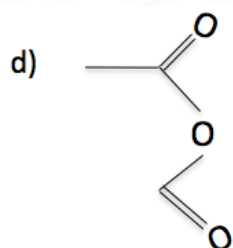
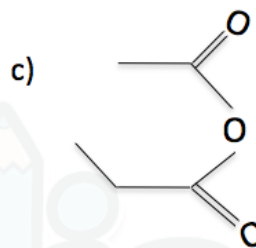
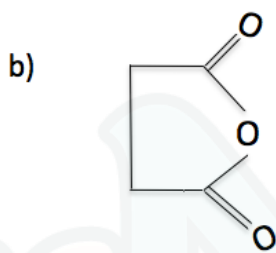
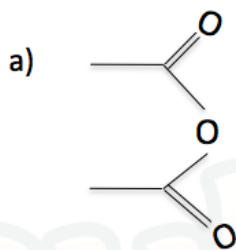


Anidrido

1) Dê as nomenclaturas:



Gabarito

- 1) a) anidrido etanóico
- b) anidrido butanóico
- c) anidrido etanóico-propanóico
- d) anidrido etanóico-metanóico
- e) anidrido benzóico