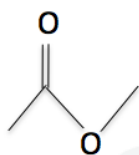


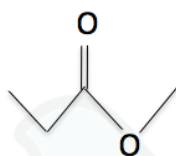
Éster

1) Dê as nomenclaturas:

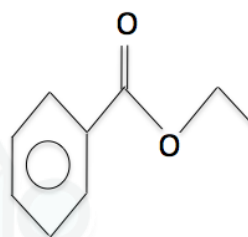
a)



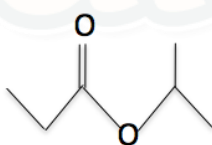
b)



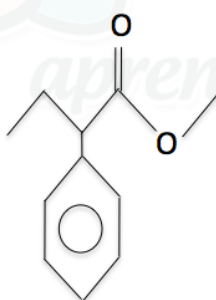
c)



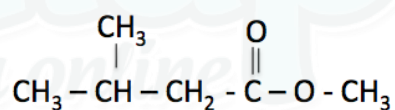
d)



e)



f)



2) Dê as fórmulas estruturais:

a) metanoato de metila

b) metil-propanoato de etila

c) benzoato de metila

d) etanoato de etila

e) fenil-propanoato de metila

f) butanoato de metila

Gabarito

- 1) a) etanoato de metila
- b) propanoato de metila
- c) benzoato de etila
- d) propanoato de sec-propila
- e) 2-fenil-butanoato de metila
- f) 3-metil-butanoato de metila

2)

