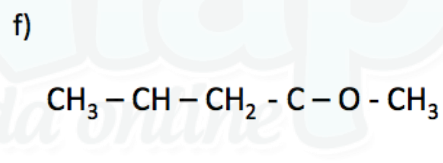
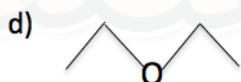
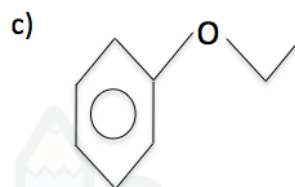
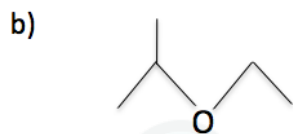
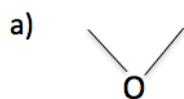


## Éter

1) Dê as nomenclaturas:



2) Dê as fórmulas estruturais:

- a) metoxi-metano
- b) metoxi-tercbutano
- c) etoxi-benzeno
- d) fenoxi-benzeno
- e) etoxi-neopentano
- f) metoxi-propano

Gabarito

- 1) a) metoxi-etano
- b) etoxi-sec-propano
- c) metoxi-benzeno
- d) metoxi-metano
- e) etoxi-secbutano
- f) metoxi-propano

2)

