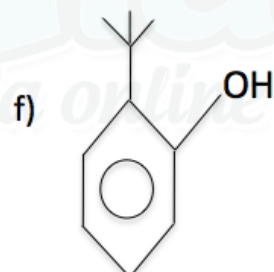
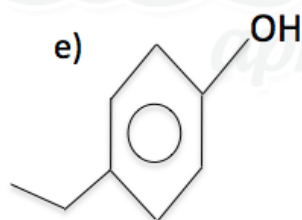
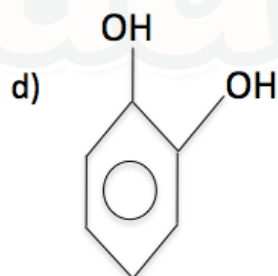
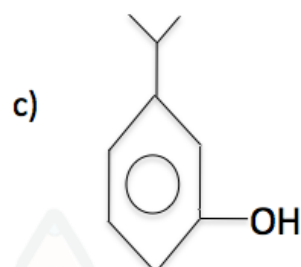
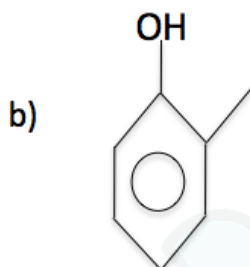
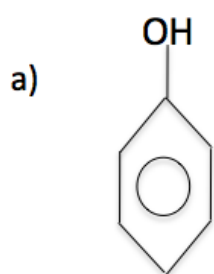


Fenol

1) Dê as nomenclaturas:



2) Dê as fórmulas estruturais:

- a) meta-hidroxi-metil-benzeno
- b) orto-hidroxi-etil-benzeno
- c) meta-hidroxi-terc-butil-benzeno
- d) o-hidroxi-isopropil-benzeno
- e) para-dihidroxi-benzeno
- f) β-hidroxi-naftaleno

Gabarito

1) a) hidroxibenzeno

b) orto-hidroximetilbenzeno

c) p-hidroxiisopropilbenzeno

d) o-dihidroxibenzeno

e) para-hidroxi-etilbenzeno

f) orto-hidroxi-terc-butilbenzeno

2)

