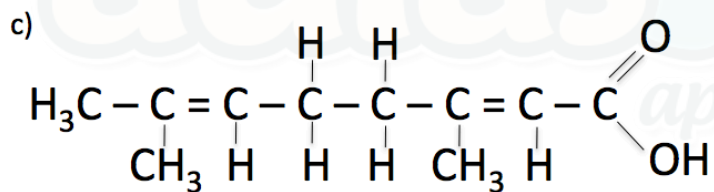
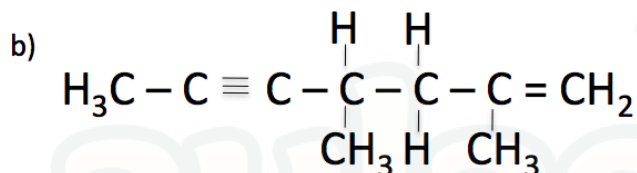
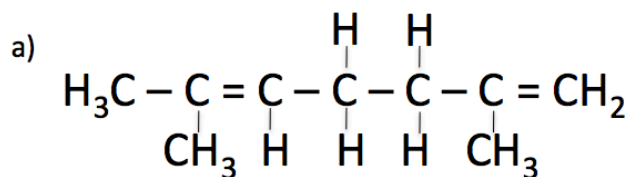
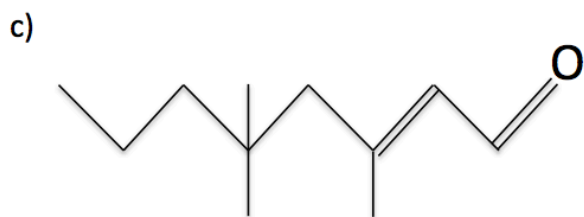
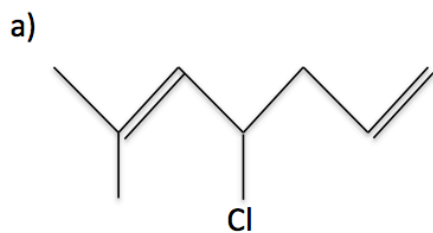


Fórmula Estrutural - Condensada - Bastão - Molecular

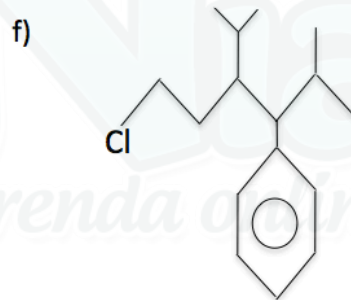
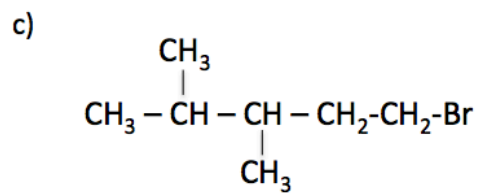
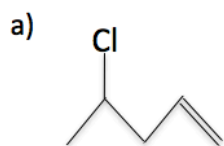
1) Faça a representação em Bastão:



2) Apresente a fórmula estrutural:



3) Apresente a fórmula molecular:



Gabarito

1)

a)



b)

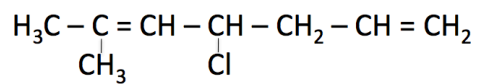


c)

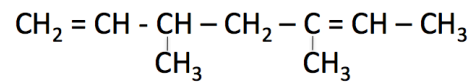


2)

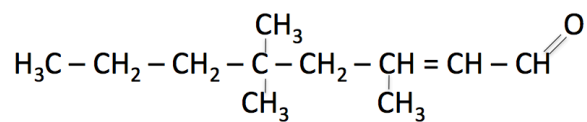
a)



b)



c)



3) a) $\text{C}_5\text{H}_9\text{Cl}$

b) $\text{C}_5\text{H}_{11}\text{Br}$

c) $\text{C}_7\text{H}_{15}\text{Br}$

d) $\text{C}_{11}\text{H}_{23}\text{I}$

e) $\text{C}_{11}\text{H}_{23}\text{Cl}$

f) $\text{C}_{16}\text{H}_{25}\text{Cl}$