

## Função do 2º Grau:

1-Esboce o gráfico da função do segundo grau:

a)  $y = 2x^2 - 5x + 2$

b)  $y = x^2 - 1$

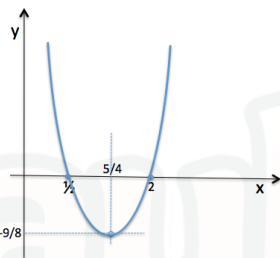
c)  $y = x^2 - 2x + 1$

d)  $f(x) = -x^2 + 4$

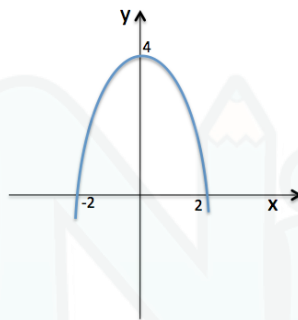
e)  $f(x) = -x^2 - x - 2$

Gabarito

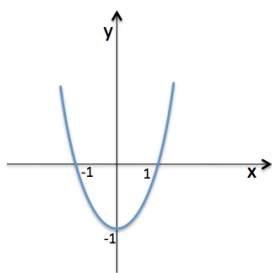
1)a)



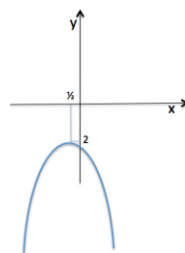
d)



b)



e)



c)

