

Nitrocomposto

1) Dê as nomenclaturas:

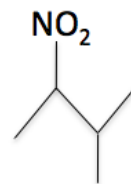
a)



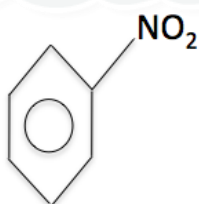
b)



c)



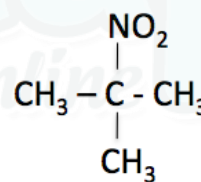
d)



e)



f)



2) Dê as fórmulas estruturais:

a) nitro-etano

b) 1-nitro-propano

c) 2-nitro-3-metil-hexano

d) 1,3-dinitro-benzeno

e) 1-nitro-2,3-trimetil-butano

f) 2-nitro-5-metil-heptano

Gabarito

- 1)a)1-nitro-propano
- b)1-nitro-2-metil-propano
- c)2-nitro-3-metil-butano
- d)nitro benzeno
- e)2,3-dinitro butano
- f)2-nitro metil propano

2)

