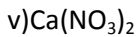
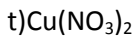
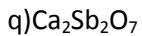
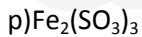
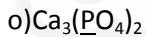
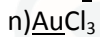
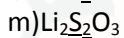
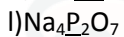
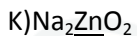
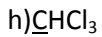
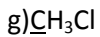
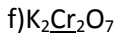
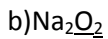


Nox

Calcule o número de oxidação dos elementos abaixo:



Gabarito:

a)-2

b)+1

c)-0,5

d)-2

e)+7

f)+6

g)-2

h)+2

i)+4

j)+6

k)+2

l)+5

m)+2

n)+3

o)+5

p)+4

q)-3

r)+3

s)+7

t)+5

u)0

v)+5

x)+5

