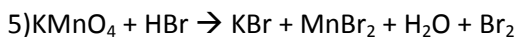
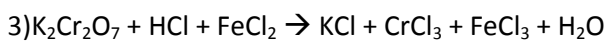
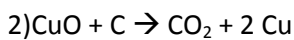
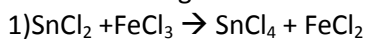
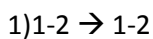


Redox

Determine o agente oxidante e o agente redutor.

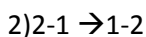


Gabarito



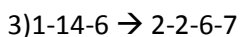
agente redutor: SnCl_2

agente oxidante: FeCl_3



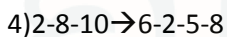
agente redutor: C

agente oxidante: CuO



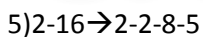
agente redutor: FeCl_2

agente oxidante: $\text{K}_2\text{Cr}_2\text{O}_7$



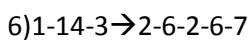
agente redutor: KI

agente oxidante: KMnO_4



agente redutor: HBr

agente oxidante: KMnO_4



agente redutor: $\text{Na}_2\text{C}_2\text{O}_4$

agente oxidante: $\text{K}_2\text{Cr}_2\text{O}_7$