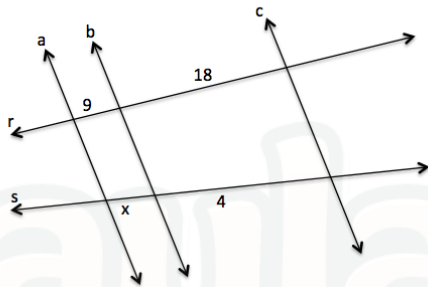


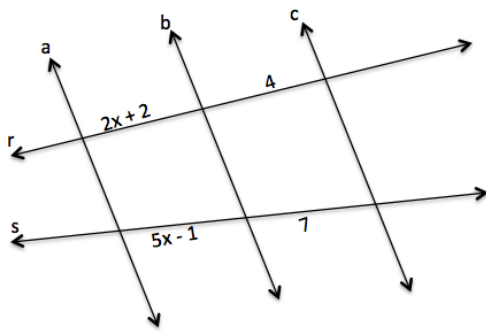
## Teorema de Tales

1) Determine o valor de  $x$ :

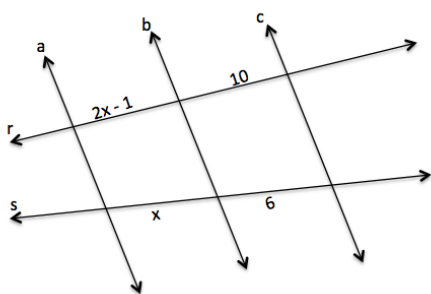
a)



b)

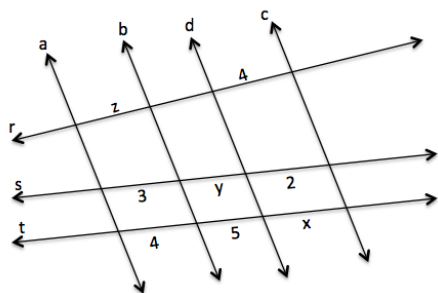


c)

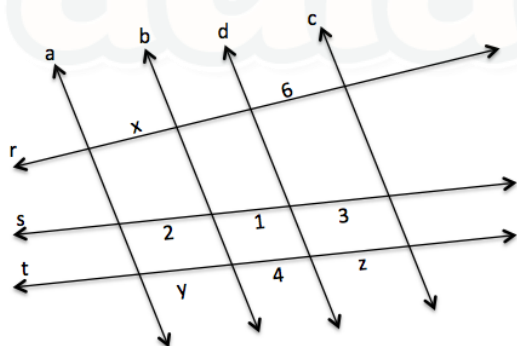


2) Determine o valor de x, y e z

a)



b)



Gabarito

1)a)2

b)3

c)3

2)a)x = 2,666...

y = 3,75

z = 4

b)x = 4

y = 8

z = 12